











- (4) Study the pictograph and answer the question that follows.

Class	Computers ( = 5 computers)
1	
2	
3	
4	?





If there is a total of 45 computers. How many  should there be in the class 4 ?


- (5) The following pictograph shows the number of books manufactured in 4 factories.

Factory	Books (Each  stands for 2 books)
1	
2	
3	
4	







Answer the following:

- Which factory manufactured the maximum number of books?
 - Which factory manufactured the minimum number of books?
 - How many books did factory 1 manufactured?
- (6) Study the pictograph and answer the question that follows.

Class	Locks ( = 3 locks)
1	
2	
3	
4	?


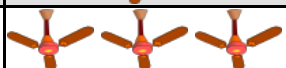
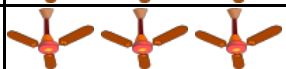

If there is a total of 33 locks. How many  should there be in the class 4 ?

(10) The following pictograph shows the number of telephones manufactured in 5 factories.

Factory	Telephones (Each  stands for 2 telephones)
1	
2	
3	
4	
5	

Answer the following:

- (a) Which factory manufactured the maximum number of telephones?
 - (b) Which factory manufactured the minimum number of telephones?
 - (c) How many telephones did factory 3 manufactured?
- (11) Study the pictograph and answer the question that follows.

Class	Fans ( = 5 fans)
1	
2	
3	
4	?

If there is a total of 50 fans. How many  should there be in the class 4 ?

(12) Look at the list of favorite channels of a group of students and answer the question.

Pogo, Pogo, Pogo, Star Gold, Cartoon Network, Star Gold, Star Plus, Cartoon Network, Pogo, Star Gold, Star Plus, Pogo, Star Plus, Star Plus

Which channel is liked by minimum number of students?

- a. Star Plus
- b. Star Gold
- c. Pogo
- d. Cartoon Network





- (13) Look at the list of favorite channels of a group of students and answer the question.

Discovery, Zee, Discovery, Zee, Discovery, Pogo, Pogo, Star Gold, Discovery, Discovery, Zee, Discovery, Pogo, Star Gold, Zee, Star Gold, Star Gold, Star Gold, Pogo, Zee, Zee, Zee, Zee, Zee

Which channel is liked by maximum number of students?

- a. Pogo b. Discovery
 c. Star Gold d. Zee

- (14) The following pictograph shows the number of printers manufactured in 3 factories.

Factory	Printers (Each  stands for 4 printers)
1	
2	
3	

Answer the following:

- (a) Which factory manufactured the maximum number of printers?
 (b) Which factory manufactured the minimum number of printers?
 (c) How many printers did factory 2 manufactured?
- (15) Look at the list of favorite channels of a group of students and answer the question.

Sony, Star Gold, Sony, Sony, Sony, Star Gold, Pogo, Sony, Sony, Zee, Pogo, Star Gold, Star Gold, Pogo, Zee, Pogo, Sony, Star Gold, Pogo, Star Gold

Which channel is liked by minimum number of students?

- a. Zee b. Pogo
 c. Sony d. Star Gold



© 2018 Edugain (www.edugain.com).
 All Rights Reserved

Many more such worksheets can be
 generated at www.edugain.com

Answers

- (1) 4
- (2) a. Star Gold
- (3) (a) 1
(b) 2
(c) 6
- (4) 3
- (5) (a) 3
(b) 2
(c) 6
- (6) 3
- (7) 3
- (8) a. Zee
- (9) c. Star Plus
- (10) (a) 5
(b) 1
(c) 6
- (11) 3
- (12) d. Cartoon Network
- (13) d. Zee
- (14) (a) 3
(b) 1
(c) 24
- (15) a. Zee